

LOHANA SCHOOLS

P.5 Religious Education REVISION WORK: 2020

ACTIVITY THREE

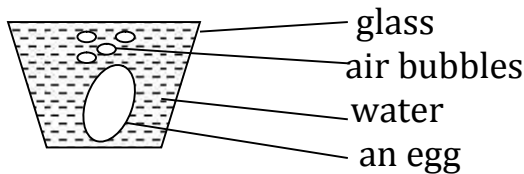
1. Either: On which day of the week do most Christians go for worship?
Or: On which day of the week do Moslems go for Juma prayers?
2. Either: Give the meaning of the name Abraham.
Or: Give the meaning of Hadith.
3. Either: What biblical event took place at Golgotha?
Or: What event marks the end of Ramadhan?
4. Either: Why did God send Moses to Egypt?
Or: Why did Allah send Prophet Musa to Misiri?
5. Either: How did Virgin Mary express her faith in God?
Or: How did Prophet Nuuhu express his faith in Allah?
6. For both: Why is it advisable to forgive a person who offends you?
7. Either: a) Write down the two great commandments taught by Jesus
(Mt.22:35-40)
b) Give two ways you can show love to other people in the community.
Or: a) Who is a hypocrite?
b) State any two signs of Munafiqun.
c) Give any one danger of Munafiqun.
8. Either: a) State any two ways Christians communicate to God.
b) Why do Christians pray?
c) What is the suitable time for prayer in Christianity?
Or: a) State two ways Muslims communicate to Allah.
b) Why do Moslems pray?
c) How many times does a true Moslem pray?
b) Why do Christians pray?
c) What is the suitable time for prayer in Christianity?
Or: a) State two ways Muslims communicate to Allah.
b) Why do Moslems pray?
c) How many times does a true moslem pray?

P.5 MATHS REVISION WORK_ACTIVITY THREE: 2020

1. What is a set?
2. If $M = \{1, 2, 3, 4, 5, 6, 7, 8\}$
 - a) What is the probability of picking a number less than 4?
 - b) What is the probability of picking an odd number at random?
3. We shall do our mathematics test next week. What is the probability that the test will be done on a day that start with letter T?
4. Find the probability of getting a tail when a coin is tossed once.
5. What is the chance of even number appearing on top when a dice is tossed once?
6. There are cups of colour blue, red, green, yellow and grey in a bucket.
 - a) What is the probability of picking a cup that start with letter g?
 - b) Find the probability of picking a yellow cup.
7. Find the place value of 6 in the number 620,493.
8. What is the value of:
 - a) 3 tens + 8 ones
 - b) 2 hundreds - 7tens.
9. Expand the following in value form.
 - a) 3 3 3 =
 - b) 7 4 8,6 0 2 =
10. Expand the following using multiples of ten.
 - a) 9 1 =
 - b) 4 3 5 0 =
11. Find the number that was expanded to give:
 - a) $(2 \times 10^1) + (1 \times 10^0)$
 - b) $(4 \times 10^3) + (0 \times 10^2) + (6 \times 10^1) + (4 \times 10^0)$
12. Below is Mercy's shopping list. Use it to answer the questions.
2 cups for sh.1000 a cup
3 eggs for sh.300 each.
10 mangoes for sh.100@.
 - a) Calculate Mercy's expenditure.
 - b) If Mercy had sh.10,000, what was her change?

P.5 SCIENCE REVISION WORK_ACTIVITY THREE: 2020

1. A P.5 class carried out an experiment below.



2. Why did the class carry out the above experiment?

2. Give one reason why a fertilized egg can fail to hatch though given enough temperature.

3. Why do farmers rear poultry?

4. Name any one product got from poultry.

5. State one way of preventing egg eating vice in poultry.

6. How is the air space in an egg adapted to its function?

7. Name the type of feather found on the tail.

8. a) Give the difference between incubation and incubation period.

b) Copy and complete the table.

Poultry	Incubation period
Duck	_____
Goose	_____
Pigeon	_____

9. **The diagram below is of a digestive system of a fowl.**

i) C

ii) D

b) How is part marked with letter A useful to the bird.

c) In which way is part marked B similar to the human teeth?

10. Why are honey bees grouped under social insects?

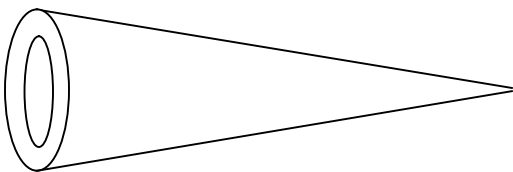
11. Name the type of bees which develop from unfertilized eggs.

12. Why do drone bees die after mating with the queen bee?

13. Name the structures used by worker bees to collect pollen.

14. How is propolis useful to worker bees?

15. Identify the bee hive illustrated below.



16. What term is used to refer the act of putting up an empty hive in an area for bees to occupy?

17. a) How is a swarm different from a colony?

b) List down any three factors that can lead bees to swarming.

18. Re-arrange the steps of harvesting honey.

- Lower the hive
- cut the honey combs
- smoke into the hive
- open the hive

P.5 English REVISION WORK_ACTIVITY THREE: 2020

Use the correct form of the word in brackets to complete the sentences.

1. Mr. Opolot is a good _____. (drive)
2. The _____ of the Global Coach disappointed the passengers. (depart)
3. The fleet crossed the busy road _____. (care)
4. His _____ to buy a Toyota car succeeded. (decide)
5. Petua has _____ a nice picture. (draw)
6. The head teacher's driving mirror has _____ off. (drop)
7. They have _____ the luggage in the boot. (put)
8. Have you _____ the brakes? (apply)
9. She has _____ off the bicycle. (fall)
10. He carried his _____ immediately he reached Kampala. (luggage)


Rewrite these sentences as instructed in brackets.

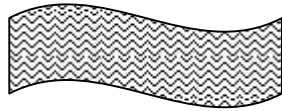
11. Mukasa is the man. He owns a big garage in Kamwokya. (Use:....who.....)
12. The car knocked the girl. The car had no brakes. (Use:....which.....)
13. We went to school on foot. It rained heavily in the morning. (Begin:Although...)
14. Mr. Ocen bought a new Benz car. He wanted to transport his children to school. (Use:....so that..)
15. That is the place. We bought the spare parts from there. (Use:...where...)
16. Teacher Janet went to school. He wanted to meet the learners. (Use: in order....)
17. I am a good mechanic,.....? (Rewrite and supply a suitable question tag)
18. Driving vehicles in bad mechanical condition is dangerous. (Begin: It is)
19. The conductor has put the luggage in the boat. (Change this sentence into plural form).
20. Mr. Kakuru is driving a lorry. (end:....Mr. Kakuru)
21. **Using the knowledge of punctuation read this story carefully and punctuate it correctly.**

MR. BIRUHIZE BUYS A MOTOR CYCLE:

it was one Tuesday morning when mr.biruhize went to bugongi market to purchase a new Boxer motorcycle. Reaching the garage the motorcycle was fore five hundred thousand shillings as told by nimbi the mechanic. In great regret mr biruhize had only four hundred thousand but he had to bargain with nimbi in order to reduce one hundred thousand for him. the motorcycle are nowadays expensive said nimbi. mr. biruhize then went back home to look for more money to buy a motorcycle.

P.5 SOCIAL STUDIES REVISION WORK ACTIVITY THREE: 2020

1. Mention any one example of drainage feature in Uganda.
2. Which physical feature covers the largest part of Uganda?
3. Why is the highest peak of Mt.Rwenzori “snow capped” throughout the year?
4.  Name the map symbol shown above.
5. Of what formation is mountain Elgon?
6. How are mountains politically important to a country?
7. a) In which two ways are mountains useful economically?
b) Write down any one problem faced in mountainous area.
c) How is soil erosion controlled in mountainous areas. (State one.)
8. a) What is a plateau?
b) How does a plateau promote crop growing.
c) State any two problems faced by people living in a plateau area.
9. Name the element of a map that explains the meaning of symbols used on a map.
10. Of what formation is Lake Kyoga?
11. Identify any one raw material used for making the craft below.



12. How is port Mombasa economically important to Uganda?
13. State any one duty of the CAO to civil servants.
14. How is culture important to people?
15. a)What are social service centres?
b) Give any two ways how social service centres are important in Uganda.
c) State any one way of caring for social service centres.
16. a) Name two places where people can get security services in our community.
b) State any two ways in which rules and regulations are important in the community.
17. What title is given to the political leader of a sub-county?
18. Give any one danger caused by speeding vehicles on roads.
19. How was fire important to the earlyman?
20. Name any one example of a traditional cash crop.
21. a)Give the meaning of the term decentralization
b) State any two reason why the government of Uganda is creating more districts.
c) Mention any one disadvantage of creating many districts.